

Name: \_\_\_\_\_

## First Grade Summer Math Review Calendar June 2017

Dear Families,

Research shows that most students lose about two months worth of skills in mathematics during the summer months. You can help stop this from happening! Attached to this letter are math review calendars for June, July, and August. For each day on the calendar, there is a question, problem, or activity for your child to do at home that will help to review the concepts covered during the school year. These concepts will be built upon as your child enters the next grade level. It is suggested by your child's math teacher that your child will work each day to review and talk about the concept with a family member. Encourage your child to explain to you what they know and to show their thinking using words, numbers, and pictures. Please initial each day of the calendar as your child completes each task. Your initials will indicate that your child not only did the task, but that you also talked about it together and/or looked at their work and that they solved it correctly.

Your child is encouraged to return the math review calendar to his or her new teacher by September 5, 2017 with all of the days initialed. He/she will receive a prize. I hope you enjoy letting your child show you how much they've learned!

Thank you,







Toluca Lake Staff

| Sunday   | Monday   | Tuesday   | Wednesday  | Thursday  | Friday  | Saturday   |
|--|--|---|--|---|---|--|
| <b>11</b><br>Draw 16 circles. How many groups of ten can you make? | <b>12</b><br>Draw 2 ten frames. Show 15 on the ten frames.   | <b>13</b><br>Add.<br>$3 + 3 + 7 = \underline{\quad}$<br>Which strategies did you use? | <b>14</b><br>Show the number combinations that make ten. For example, $1 + 9 = 10$ | <b>15</b><br>Compare the numbers:<br>$17 \underline{\quad} 14$<br>Explain how you know you are correct. | <b>16</b><br>Start at 32 and count to 100                   | <b>17</b><br>Abigail has 52 markers. How many bundles of ten can she make? |
| <b>18</b><br>Use objects in your house to show the number 18.      | <b>19</b><br>Find the sums:<br>$48 + 10 = \underline{\quad}$<br>$32 + 40 = \underline{\quad}$<br>$56 + 30 = \underline{\quad}$ | <b>20</b><br>Compare using $>, <, =$<br><b>35</b> $\underline{\quad}$ <b>53</b>       | <b>21</b><br>What number comes between 39 and 41?                                  | <b>22</b><br>Use objects or draw a picture to show:<br>$7 + 5 = \underline{\quad}$                      | <b>23</b><br>Find the missing number.<br>$10 - \square = 8$ | <b>24</b><br>Practice your subtraction facts.                              |

Name: \_\_\_\_\_

# First Grade Summer Math Review Calendar July 2017

| Sunday   | Monday  | Tuesday  | Wednesday   | Thursday  | Friday  | Saturday  |
|--|---|--|---|---|---|---|
| <b>25</b> Tyler has 15 m&m's. He gives 6 to his brother. How many m&m's does Tyler have left?      | <b>26</b> Count to 100.   | <b>27</b> Use objects in your house to show the number 56.   | <b>28</b> How many groups of ten are in the number 72?  | <b>29</b> Write the number that has 7ones and 8 tens.   | <b>30</b> Use objects in your house to show the number 62.                                    | <b>1</b> Find the differences:<br>$80 - 10 = \underline{\quad}$<br>$70 - 20 = \underline{\quad}$<br>$40 - 30 = \underline{\quad}$ |
| <b>2</b> Joey read 52 pages of his book. Then he read 10 more pages. How many pages did Joey read? | <b>3</b> How many cubes can you find in your house?   | <b>4</b> Draw a shape with 3 sides and 3 angles. What shape did you draw? Can you draw another one that is different?                  | <b>5</b> How many cylinders can you find in your house?   | <b>6</b> Write five different doubles addition facts and solve them.                          | <b>7</b> Draw a circle and a square. Partition each one to show halves.                       | <b>8</b> Practice your addition facts.  |
| <b>9</b> Use 3 pencils or crayons. Line them up from longest to shortest.                          | <b>10</b> What number is 10 less than 59? Draw a picture to show your thinking.                           | <b>11</b> Draw a circle and a square. Partition each one to show fourths.  | <b>12</b> What number is shown?<br> | <b>13</b> Molly has 62 books. She makes groups of ten. How many leftover books will she have? | <b>14</b> Write ten different addition facts with a sum of 10.                                | <b>15</b> Use paper clips or noodles to measure a toy. How long is it?  |
| <b>16</b> Start at 62 and count to 120   | <b>17</b> Practice your addition facts.   | <b>18</b> Partition the square to show fourths.<br> | <b>19</b> Draw 3 different rectangles.  | <b>20</b> Write five different "minus 2" facts and solve them.                                | <b>21</b> Draw two different shapes that have 4 sides. Tell how they are alike and different. | <b>22</b> Practice your subtraction facts.  |
| <b>23</b> Find 3 sticks in your yard. Put them in order from longest to shortest.                  | <b>24</b> Amy has 4 boxes of cookies. Each box has 10 cookies. How many cookies does she have altogether? | <b>25</b> Draw a square, a rectangle and a trapezoid. How are these shapes alike?  |                                   |   |          |   |

Name: \_\_\_\_\_

# First Grade Summer Math Review Calendar August 2017

| Sunday   | Monday  | Tuesday  | Wednesday   | Thursday  | Friday   | Saturday   |
|--|---|--|---|---|--|--|
|  |   |  | <b>26</b><br>Find an example of a cylinder in your house.   | <b>27</b><br>Find an example of a rectangular prism in your house.                      | <b>28</b><br>What number is 20 more than 54? Draw a picture to show your thinking. | <b>29</b><br>Write five different make ten addition facts and solve them.  |
| <b>30</b><br>Add.<br>$42 + 36 =$   | <b>31</b><br>Find the missing number.<br>$12 + \square = 18$  | <b>1</b><br>Subtract.<br>$90 - 30 =$   | <b>2</b><br>Find the missing number.<br>$18 - \square = 13$ | <b>3</b><br>Taylor has 27 jellybeans. She eats 15 of them. How many does she have left? | <b>4</b><br>Practice your addition facts.  | <b>5</b><br>Practice your subtraction facts.   |
| <b>6</b> What time does the clock show?<br> | <b>7</b> Draw hands to show 8:00.<br>  | <b>8</b><br>Draw a picture to show 74.   | <b>9</b><br>How many spheres can you find in your house?    | <b>10</b><br>What is 10 less than 45?   | <b>11</b><br>Use paper clips or noodles to measure a book. How long is it?         | <b>12</b><br>Write five different counting on addition facts. Solve them.  |
| <b>13</b><br>Write five different "minus 4" facts and solve them.  | <b>14</b> Place objects in order by weight (lightest to heaviest). Estimate their weight to order them and then check your order using a scale.   | <b>15</b><br>Add:<br>$4 + 6 + 5 = \underline{\quad}$<br>What strategies did you use? | <b>16</b><br>Practice your addition facts.                  | <b>17</b><br>Write the addition and subtraction facts for these numbers:<br>2, 8, 10    | <b>18</b><br>Find the missing number.<br>$4 + \square = 9$                         | <b>19</b><br>Ben finds 5 shells on the beach. His sister Jill finds 8 shells on the beach. How many shells did they find altogether? |
| <b>20</b><br>Use objects or draw a picture to show:<br>$17 - 9 = \underline{\quad}$  | <div style="text-align: center;">  <p>for a FREE kid's meal to HomeTown Buffet &amp; Island's Restaurants</p> <h2>Welcome Back!</h2> <p>School Starts August 15</p> </div> |  |   |   |  |  |

Show your completed calendar to your teacher by September 5